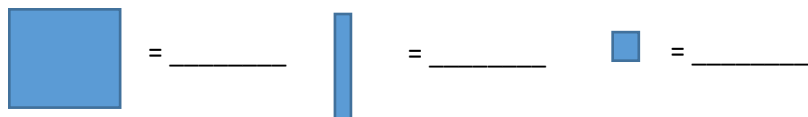


Name _____

Modeling Decimals Homework

1) What is the decimal value of each block?



2) Draw a model for each of the values below:

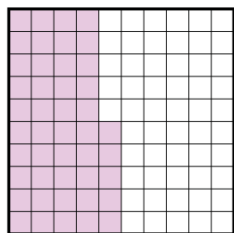
A) 5.03


B) 0.39

C) 2.4

3) Determine the value of each model, then compare using $<$, $>$ or $=$

a)





b)

